

This question paper contains 16+3 printed pages + Statistical tables Attached]

Roll No.

--	--	--	--	--	--	--	--	--	--	--	--	--	--	--	--	--	--	--	--

S. No. of Question Paper : 2396

Unique Paper Code : 2271403

F-4

Name of the Paper : **Introductory Econometrics**

Name of the Course : **B.A. (Hons.) Economics**

Semester : **IV**

Duration : **3 Hours**

Maximum Marks : **75**

(Write your Roll No. on the top immediately on receipt of this question paper.)

(इस प्रश्न-पत्र के मिलते ही ऊपर दिए गए निर्धारित स्थान पर अपना अनुक्रमांक लिखिए।)

Note : Answers may be written *either* in English *or* in Hindi; but the same medium should be used throughout the paper.

टिप्पणी : इस प्रश्न-पत्र का उत्तर अंग्रेजी या हिन्दी किसी एक भाषा में दीजिए; लेकिन सभी उत्तरों का माध्यम एक ही होना चाहिए ।

The question paper consists of *seven* questions.

Attempt any *five* questions.

Each question carries **15** marks. Use of simple non-programmable calculator is allowed.

Statistical tables are attached for your reference.

इस प्रश्न-पत्र में 7 प्रश्न हैं। किन्हीं **पाँच** प्रश्नों के उत्तर दीजिए।

प्रत्येक प्रश्न **15** अंक का है। सरल अप्रोग्रामीय कैल्कुलेटर का प्रयोग अनुमोदित है।

संदर्भ के लिए सांख्यिकीय सारणियाँ संलग्न हैं।

P.T.O.

1. Are the following statements correct ? Justify your answers carefully and provide proofs wherever necessary :

(a) In the regression of Y on X_2 , and X_3 , if all X_3 are identical, variance of partial regression coefficient of X_3 is zero.

(b) If we multiply both Y and X by 1000 and re-estimate the regression, the slope coefficient will get multiplied by 1000.

(c) The value of \bar{R}^2 is always greater than R^2 .

(d) In a simple regression model, at a given level of significance, it is not necessary to perform both t -test of estimated slope coefficient and F-test for the goodness of fit.

(e) $Y_i = \beta_1 + \beta_2 X_{2i} + \beta_3 X_{3i} + \varepsilon_i$ is estimated as $\hat{Y}_i = \hat{\beta}_1 + \hat{\beta}_2 X_{2i} + \hat{\beta}_3 X_{3i}$ using OLS. Here X_2 and β_1 are random variables and $\hat{\beta}_3$ is unknown. 3×5

क्या निम्नलिखित कथन सही हैं ? अपने उत्तरों के लिए सावधानीपूर्वक तर्क दीजिए व जहाँ आवश्यक हो वहाँ प्रमाण भी दीजिए :

(a) Y के X_2 व X_3 पर समाश्रयण में यदि सभी X_3 बराबर हों, तो X_3 के आंशिक समाश्रयण गुणांक का प्रसरण शून्य होता है।

- (b) यदि हम Y व X दोनों को 1000 से गुणा करें व समाश्रयण को दुबारा आकलित करें तो ढाल गुणांक 1000 गुना हो जाएगा।
- (c) \bar{R}^2 का मान हमेशा R^2 से अधिक होता है।
- (d) एक सरल रेखीय समाश्रयण मॉडल में एक दिए गए सार्थकता स्तर पर आकलित ढाल गुणांक के t -परीक्षण व फिट की उपयुक्तता (Goodness of fit) के लिए F -परीक्षण, दोनों को करने की कोई आवश्यकता नहीं है।
- (e) $Y_i = \beta_1 + \beta_2 X_{2i} + \beta_3 X_{3i} + \varepsilon_i$ का OLS की सहायता से आकलन करने पर $\hat{Y}_i = \hat{\beta}_1 + \hat{\beta}_2 X_{2i} + \hat{\beta}_3 X_{3i}$ प्राप्त होता है। यहाँ X_2 व β_1 यादृच्छिक चर हैं तथा $\hat{\beta}_3$ अज्ञात है।

2. (a) For a given model, $Y_i = \beta_1 + \beta_2 X_{2i} + \beta_3 X_{3i} + u_i$, prove that if we omit X_3 (a relevant variable) then the OLS estimator of β_2 is not unbiased. What does the direction of the bias depend on ?

- (b) Based on data collected on a particular Monday for 13 B.A. (H) Economics second year students we want to estimate the following population regression equation :

$$Y_i = \beta_1 + \beta_2 X_i + u_i$$

where :

Y_i : Travelling time (in hrs) for the i th student from her home to college.

X_i : Distance from home to college for i th student in km.

The sample gave the following values :

$$\Sigma X_i = 195, \Sigma Y_i = 26, \Sigma X_i^2 = 3050, \Sigma Y_i^2 = 53, \Sigma X_i Y_i = 400$$

Using the above data and assuming that all the CLRM assumptions are satisfied, establish a 95% confidence interval for the predicted mean travelling time when the distance between college and a student's house is 11 km. 5,10

- (a) दिए गए मॉडल $Y_i = \beta_1 + \beta_2 X_{2i} + \beta_3 X_{3i} + u_i$ हेतु सिद्ध कीजिए कि यदि हम चर X_3 (एक प्रासंगिक चर) को छोड़ देते हैं तो β_2 का OLS आकलक अनभिन्न नहीं होता। अभिन्नता की दिशा किस पर निर्भर करती है ?

- (b) किसी सोमवार को B.A.(H) अर्थशास्त्र द्वितीय वर्ष की 13 छात्राओं से संग्रहित किए गए आँकड़ों के आधार पर हम निम्नलिखित समष्टि समाश्रयण समीकरण (Population regression equation) को आकलित करना चाहते हैं :

$$Y_i = \beta_1 + \beta_2 X_i + u_i$$

जहाँ

Y_i : i वीं छात्रा के लिए उसके घर से कॉलेज की यात्रा में लगने वाला समय (घण्टों में)

X_i : i वीं छात्रा के लिए घर से कॉलेज तक की दूरी किमी में

इस प्रतिदर्श से निम्नलिखित मान प्राप्त हुए :

$$\sum X_i = 195, \sum Y_i = 26, \sum X_i^2 = 3050, \sum Y_i^2 = 53, \sum X_i Y_i = 400$$

यह मानते हुए कि CLRM की सभी मान्यताएँ सन्तुष्ट होती हैं, उपर्युक्त मानों की सहायता से यात्रा में लगने वाले समय पूर्वकथित माध्य हेतु 95% विश्वास्यता अन्तराल ज्ञात कीजिए यदि कॉलेज व एक छात्रा के घर के मध्य दूरी 11 किमी है।

3. (a) For the model $Y_i = \beta_1 + u_i$. Given that all the CLRM assumptions are satisfied, use OLS to find the estimator of β_1 . Show that this estimator can be decomposed into the true value plus a linear combination of the disturbance term in the sample. Also demonstrate that this estimator is an unbiased estimator of β_1 .

- (b) Based on data on GNP and money supply for the period 1965-2006 for India, the following regression results were obtained by regressing GNP (in billions of Rupees) on money supply (in billions of Rupees) for alternate models :

Model	Intercept	Slope	R ²
	Coefficient ($\hat{\beta}_0$)	Coefficient ($\hat{\beta}_1$)	
Log-linear	0.8726 (11.40)	0.7839 (108.93)	0.927
Log-lin	6.2392 (75.85)	0.0002 (12.07)	0.852
Lin-log	14299 (14.45)	2383.4 (16.84)	0.879
Linear	603.28 (7.04)	0.3718 (55.58)	0.921

Where the figures in parentheses are *t*-ratios.

- (i) For each model, interpret the slope coefficient.
- (ii) For each model, estimate the elasticity of GNP with respect to money supply (sample means of the GNP and money supply are 5113.65 and 9347.53 respectively.)
- (iii) Are all R² values comparable? If not, which ones are?

6,4+4+1

- (a) मॉडल $Y_i = \beta_1 + u_i$ के लिए OLS की सहायता से β_1 का आकलक ज्ञात कीजिए। दर्शाइए कि इस आकलक को दो भागों में वियोजित किया जा सकता है, जहाँ एक भाग सही मान है तथा दूसरा भाग प्रतिदर्श में त्रुटि पद का रेखीय संयोजन (Linear Combination) है। यह भी दर्शाइए कि यह आकलक β_1 का एक अनभिनत (Unbiased) आकलक है।
- (b) 1965-2006 की अवधि के लिए भारत के लिए GNP व मुद्रा की आपूर्ति के आँकड़ों के आधार पर GNP (खरब रुपयों में) का मुद्रा की आपूर्ति (खरब रुपयों में) पर समाश्रयण करने पर निम्नलिखित समाश्रयण परिणाम प्राप्त हुए :

मॉडल	अन्तःखण्ड गुणांक ($\hat{\beta}_0$)	द्वल गुणांक ($\hat{\beta}_1$)	R ²
Log-linear	0.8726 (11.40)	0.7839 (108.93)	0.927
Log-lin	6.2392 (75.85)	0.0002 (12.07)	0.852
Lin-log	14299 (14.45)	2383.4 (16.84)	0.879
Linear	603.28 (7.04)	0.3718 (55.58)	0.921

जहाँ कोष्ठकों में दी गई संख्याएँ t -मान हैं।

(i) प्रत्येक मॉडल हेतु ढाल गुणांक की व्याख्या कीजिए।

(ii) प्रत्येक मॉडल हेतु GNP की मुद्रा की आपूर्ति के सापेक्ष लोच आकलित कीजिए (GNP व मुद्रा की आपूर्ति के प्रतिदर्श माध्यों के मान क्रमशः 5113.65 तथा 9347.53 हैं।)

(iii) क्या सारे R^2 मान तुलनीय हैं ? यदि नहीं, तो कौन-कौनसे तुलनीय हैं ?

4. (a) Elaborate how auxiliary/subsidiary regression can be used to detect the presence of multicollinearity. How is this method different from observing pairwise correlation coefficients ?

(b) To study the rate of growth of population of a country over the period 1970-1992, the following models were estimated :

$$\text{Model I : } \ln(\hat{\text{Pop}})_t = 4.73 + 0.024t$$

$$\text{se (0.5747) (0.004) \quad RSS = 100.515}$$

$$\text{Model II : } \ln(\hat{\text{Pop}})_t = 4.77 + 0.015t - 0.075D_t + 0.011 (D_t t)$$

$$\text{se (0.103) (0.0042) (0.018) \quad (0.002)}$$

where

\ln : natural logarithm

Pop : population in millions

t : trend variable

$D_t = 1$ for observations 1978-1992

$= 0$ for observations 1970-1977

- (i) In model I, what is the instantaneous rate of growth of the country's population over the sample period ?
- (ii) What are the instantaneous rates of growth of population for the period 1970-1977 and for the period 1978-1992 ? Are these rates statistically different at 5% level of significance ?
- (iii) The researcher also estimated separate regressions for the two time periods.

Time period : 1970-1977 : $RSS_A = 15.603$

Time period : 1978-1992 : $RSS_B = 52.752$

Apply the Chow test at 5% level of significance to determine if there is an evidence of a structural break in 1978.

5,1+5+4

P.T.O.

- (a) सहायक (Auxiliary/subsidiary) समाश्रयणों की सहायता से किस प्रकार बहुसंख्यता का पता लगाया जा सकता है। विस्तार से विवेचन कीजिए। यह विधि युग्म-वार (Pairwise) सहसम्बन्धों को प्रेक्षित करने से किस प्रकार भिन्न है ?
- (b) 1970-1992 के दौरान एक देश की जनसंख्या की वृद्धि दर का अध्ययन करने के लिए निम्नलिखित मॉडलों को आकलित किया गया :

$$\text{Model I : } \ln(\hat{\text{Pop}})_t = 4.73 + 0.024t$$

$$\text{se (0.5747) (0.004) \quad RSS = 100.515}$$

$$\text{Model II : } \ln(\hat{\text{Pop}})_t = 4.77 + 0.015t - 0.075D_t + 0.011 (D_t t)$$

$$\text{se (0.103) (0.0042) (0.018) (0.002)}$$

जहाँ

\ln : प्राकृतिक लघुगणक

Pop : जनसंख्या दस लाख में

t : प्रवृत्ति चर

$D_t = 1$, 1978-1992 के प्रेक्षणों हेतु

$= 0$, 1970-1977 के प्रेक्षणों हेतु

(i) मॉडल I में देश की जनसंख्या की प्रतिदर्श की अवधि के दौरान तात्कालिक (Instantaneous) वृद्धि दर क्या है ?

(ii) 1970-1977 व 1978-1992 की अवधियों के लिए जनसंख्या की तात्कालिक वृद्धि दरें क्या-क्या हैं ? क्या ये दरें 5% सार्थकता स्तर पर सांख्यिकीय रूप से भिन्न हैं ?

(iii) शोधकर्ता ने दो अवधियों के लिए पृथक् समाश्रयण भी आकलित किए :

$$\text{कालावधि : 1970-1977 : } \text{RSS}_A = 15.603$$

$$\text{कालावधि : 1978-1992 : } \text{RSS}_B = 52.752$$

1978 में किसी संरचनात्मक परिवर्तन का प्रमाण है या नहीं, इस बात का निर्धारण चाऊ के परीक्षण 5% सार्थकता स्तर की सहायता से कीजिए।

5. (a) In the following linear model it was found that X_1 and X_2 are highly correlated. $Y_i = \beta_0 + \beta_1 X_{1i} + \beta_2 X_{2i} + u_i$. Under which circumstances can this collinearity be ignored ?

(b) A researcher estimated the following regression :

$$\ln(\text{Salary})_i = 53.809 + .0438 \text{ Years}_i - 6.237 \text{ Years}_i^2 + e_i$$

$$t = (92.1)$$

$$(9.08)$$

$$(-5.19)$$

$$R^2 = 0.789$$

$$n = 219$$

where

ln : natural log

Salary : Salary of an individual (Rs. '000s)

Years : Years of experience

When the White's General test for heteroscedasticity at 5% level of significance was conducted, the R^2 obtained from the regression of e_i^2 on a constant, Years, Years^2 and Years^3 was 0.45. Is the researcher correct in concluding that Years and Years^2 are individually significant explanatory variables in the salary regression ? Why ? Why not ?

- (c) Explain with an example how you can deseasonalize a time series with the use of dummy variables. 5,5,5

- (a) निम्नलिखित रेखीय मॉडल में यह पाया गया कि X_1 व X_2 में काफी अधिक सहसम्बन्ध है।

$$Y_i = \beta_0 + \beta_1 X_{1i} + \beta_2 X_{2i} + u_i$$

किन परिस्थितियों में इस सरिखता की उपेक्षा की जा सकती है ?

- (b) एक शोधकर्ता ने निम्नलिखित समाश्रयण आकलित किया

$$\ln(\text{Salary})_i = 53.809 + .0438 \text{Years}_i - 6.237 \text{Years}_i^2 + e_i$$

$$t = (92.1) \qquad (9.08) \qquad (-5.19)$$

$$R^2 = 0.789 \qquad = 219$$

जहाँ

In : प्राकृतिक लघुगणक

Salary : व्यक्ति का वेतन (हजारों रुपयों में)

Years : अनुभव, वर्षों में

जब प्रसरण-विषमता (Heteroscedasticity) हेतु व्हाइट का सामान्य परीक्षण किया गया तो स्थिरांक, Years, Years² व Years³ पर e_i^2 के समाश्रयण में R² का मान 0.45 प्राप्त हुआ। क्या शोधकर्ता का यह निष्कर्ष सही है कि वेतन के समाश्रयण में Years व Years² व्यक्तिगत रूप से सांख्यिकीय रूप से सार्थक हैं ? क्यों या क्यों नहीं ?

(c) एक उदाहरण की सहायता से समझाइए कि आप डमी चरों की विधि की सहायता से एक काल-श्रेणी को विमौसमीकृत (Deseasonalize) किस प्रकार करेंगे ?

6. (a) Consider the following two variable population regression function :

$$Y_i = \beta_1 + \beta_2 X_{2i} + u_i$$

where $u_i \sim N(\text{mean} = 0, \text{variance} = \sigma_i^2)$ and σ_i^2 are known. Also u_i satisfied all other assumptions of CLRM. Now if you apply weighted least square then what will be the dependent and independent variables ? Will the sum of residuals be equal to zero in the transformed model ?

- (b) How do you test for normality of error terms in the population regression function using Jarque-Bera test.
- (c) Consider the following regression results :

$$\text{CHOL}_i = 7.23 + 1.39 \text{DSed}_i + 2.1 \text{Fat}_i + e_i$$

$$n = 35$$

$$d = 1.42$$

where

CHOL_i : Level of cholesterol in blood (mg/ml)

$\text{DSed}_i = 1$ if sedentary lifestyle

$= 0$ otherwise

Fat_i : Intake of fats (gms/day)

Test if the model suffers from AR(1) autocorrelation at 5% level of significance.

- (d) For the model $Y_i = \beta_1 + \beta_2 X_{2i} + \beta_3 Y_{t-1} + u_i$, an auxiliary regression found :

$$\hat{u}_i = 2.3 + 1.539X_{2i} + 1.32Y_{t-1} + .892\hat{u}_{t-1}$$

$$\text{se} = (0.99) \quad (.089) \quad (.051) \quad (.0058)$$

$$R^2 = 0.567 \quad n = 34$$

Use the Breusch-Godfrey test to check for the presence of AR(1) scheme of autocorrelation at 1% level of significance.

(a) निम्नलिखित द्वि-चर समष्टि समाश्रयण फलन पर विचार कीजिए :

$$Y_i = \beta_1 + \beta_2 X_{2i} + u_i$$

जहाँ $u_i \sim N(\text{माध्य} = 0, \text{प्रसरण} = \sigma_i^2)$ तथा σ_i^2 ज्ञात हैं। यह मानते हुए कि CLRM की अन्य सभी मान्यताएँ वैध हैं। अब यदि आप भारित न्यूनतम वर्ग विधि (Weighted least squares) विधि का उपयोग करें तो निर्भर व स्वतन्त्र चर क्या-क्या होंगे ? क्या भारित वर्ग विधि से प्राप्त अवशिष्टों का योगफल शून्य होगा ?

(b) आप जार्क-बीरा परीक्षण की सहायता से समष्टि समाश्रयण फलन में त्रुटि पदों की प्रसामान्यता हेतु परीक्षण किस प्रकार करेंगे ?

(c) निम्नलिखित समाश्रयण परिणामों पर विचार कीजिए :

$$\text{CHOL}_i = 7.23 + 1.39 \text{ DSed}_i + 2.1 \text{ Fat}_i + e_i$$

$$n = 35$$

$$d = 1.42$$

जहाँ CHOL_i : रक्त में कॉलेस्ट्रॉल का स्तर (mg/ml)

$\text{DSed}_i =$ डमी चर, $= 1$ यदि जीवनशैली गतिविहीन (Sedentary) हैं,

$= 0$ अन्यथा

Fat_i : वसा की खुराक (ग्राम प्रतिदिन)

क्या यह मॉडल AR(1) पद्धति द्वारा जनित स्वसहसम्बन्ध के लिए 5% सार्थकता स्तर से ग्रस्त है, परीक्षण कीजिए।

- (d) मॉडल $Y_i = \beta_1 + \beta_2 X_{2i} + \beta_3 Y_{t-1} + u_i$ के लिए एक सहायक समाश्रयण से पता लगा कि

$$\hat{u}_i = 2.3 + 1.539X_{2i} + 1.32Y_{t-1} + .892\hat{u}_{t-1}$$

$$se = (0.99) \quad (.089) \quad (.051) \quad (.0058)$$

$$R^2 = 0.567 \quad n = 34$$

ब्रूश-गॉडफ्री परीक्षण की सहायता से AR(1) पद्धति द्वारा जनित स्वसहसम्बन्ध के लिए 1% सार्थकता स्तर पर परीक्षण कीजिए।

7. (a) Explain why is it impossible to fit a linear regression if there exist perfect linear relationship(s) between 2 or more explanatory variables. Give a technical/mathematical explanation.

Is the estimation still impossible if this linear relation is not perfect? Why, why not?

- (b) Let the population regression function be :

$$Y_i = \beta_1 + \beta_2 X_{2i} + \beta_3 X_{3i} + u_i$$

How will you transform the model to obtain homoscedastic errors under each of the following cases, assuming other CLRM assumptions for u_i hold :

(i) $u_i = \varepsilon_i (X_{2i})^{1/2}$

(ii) $u_i = \varepsilon_i Z_i$ (where Z_i is a non-stochastic variable which does not belong to this model)

(iii) $E(u_i^2) = \sigma^2 / X_{3i}$

It is given that $\varepsilon_i \sim N$ (mean = 0, variance = σ^2)

- (c) For the following estimated model can we test for AR(1) scheme of autocorrelation using Durbin-Watson d -test ? Why or why not ? Use the relevant test at 5% level of significance to check for autocorrelation :

$$Y_t = 4.291 + 1.24X_{1t} - 3.546X_{2t} + 0.0273Y_{t-1} + e_t$$

$$Se = (1.24) \quad (0.36) \quad (0.34) \quad (.0981)$$

$$R^2 = 0.92 \quad d = 1.32 \quad n = 40.$$

5,2+2+2,4

- (a) यदि दो या अधिक व्याख्याकारी चरों के मध्य पूर्ण रेखीय सम्बन्धों का अस्तित्व है, तो एक रेखीय समाश्रयण फिट करना सम्भव क्यों नहीं है, इस हेतु तकनीकी/गणितीय स्पष्टीकरण दीजिए। यदि रेखीय सम्बन्ध पूर्ण नहीं हो तो भी क्या आकलन असम्भव है ? क्यों या क्यों नहीं ?

- (b) मान लीजिए कि समष्टि समाश्रयण फलन निम्न प्रकार है :

$$Y_i = \beta_1 + \beta_2 X_{2i} + \beta_3 X_{3i} + u_i$$

निम्नलिखित स्थितियों में प्रसरणसम (Homoscedastic) त्रुटियाँ प्राप्त करने हेतु मॉडल को किस प्रकार रूपान्तरित करेंगे, यह मानते हुए कि CLRM की अन्य सभी मान्यताएँ वैध हैं :

(i) $u_i = \varepsilon_i (X_{2i})^{1/2}$

- (ii) $u_i = \varepsilon_i Z_i$ (जहाँ Z_i एक अयादृच्छक (non-random) चर है जो कि इस मॉडल में नहीं है)

(iii) $E(u_i^2) = \sigma^2 / X_{3i}$

यह दिया हुआ है कि $\varepsilon_i \sim N$ (माध्य = 0, प्रसरण = σ^2)

- (c) निम्नलिखित आकलित मॉडल में AR(1) पद्धति के स्वसहसम्बन्ध की उपस्थिति के लिए क्या डर्बिन-वॉट्सन के d -परीक्षण की सहायता से परीक्षण किया जा सकता है ? क्यों या क्यों नहीं ? 5% सार्थकता स्तर पर स्वसहसम्बन्ध की उपस्थिति के लिए उचित परीक्षण कीजिए।

$$Y_t = 4.291 + 1.24X_{1t} - 3.546X_{2t} + 0.0273Y_{t-1} + e_t$$

$$Se = (1.24) \quad (0.36) \quad (0.34) \quad (.0981)$$

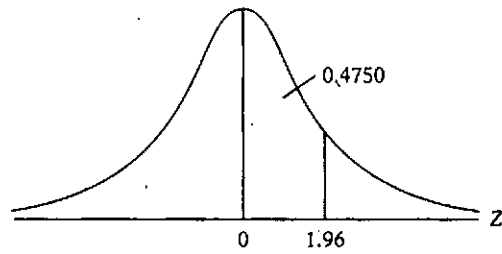
$$R^2 = 0.92 \quad d = 1.32 \quad n = 40.$$

TABLE AREAS UNDER THE STANDARDIZED NORMAL DISTRIBUTION

Example

$\Pr(0 \leq Z \leq 1.96) = 0.4750$

$\Pr(Z \geq 1.96) = 0.5 - 0.4750 = 0.025$



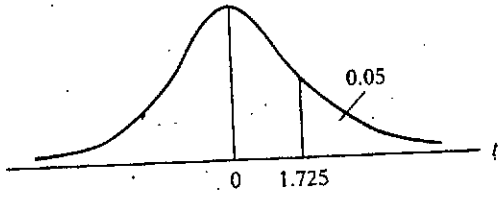
Z	.00	.01	.02	.03	.04	.05	.06	.07	.08	.09
0.0	.0000	.0040	.0080	.0120	.0160	.0199	.0239	.0279	.0319	.0359
0.1	.0398	.0438	.0478	.0517	.0557	.0596	.0636	.0675	.0714	.0753
0.2	.0793	.0832	.0871	.0910	.0948	.0987	.1026	.1064	.1103	.1141
0.3	.1179	.1217	.1255	.1293	.1331	.1368	.1406	.1443	.1480	.1517
0.4	.1554	.1591	.1628	.1664	.1700	.1736	.1772	.1808	.1844	.1879
0.5	.1915	.1950	.1985	.2019	.2054	.2088	.2123	.2157	.2190	.2224
0.6	.2257	.2291	.2324	.2357	.2389	.2422	.2454	.2486	.2517	.2549
0.7	.2580	.2611	.2642	.2673	.2704	.2734	.2764	.2794	.2823	.2852
0.8	.2881	.2910	.2939	.2967	.2995	.3023	.3051	.3078	.3106	.3133
0.9	.3159	.3186	.3212	.3238	.3264	.3289	.3315	.3340	.3365	.3389
1.0	.3413	.3438	.3461	.3485	.3508	.3531	.3554	.3577	.3599	.3621
1.1	.3643	.3665	.3686	.3708	.3729	.3749	.3770	.3790	.3810	.3830
1.2	.3849	.3869	.3888	.3907	.3925	.3944	.3962	.3980	.3997	.4015
1.3	.4032	.4049	.4066	.4082	.4099	.4115	.4131	.4147	.4162	.4177
1.4	.4192	.4207	.4222	.4236	.4251	.4265	.4279	.4292	.4306	.4319
1.5	.4332	.4345	.4357	.4370	.4382	.4394	.4406	.4418	.4429	.4441
1.6	.4452	.4463	.4474	.4484	.4495	.4505	.4515	.4525	.4535	.4545
1.7	.4454	.4564	.4573	.4582	.4591	.4599	.4608	.4616	.4625	.4633
1.8	.4641	.4649	.4656	.4664	.4671	.4678	.4686	.4693	.4699	.4706
1.9	.4713	.4719	.4726	.4732	.4738	.4744	.4750	.4756	.4761	.4767
2.0	.4772	.4778	.4783	.4788	.4793	.4798	.4803	.4808	.4812	.4817
2.1	.4821	.4826	.4830	.4834	.4838	.4842	.4846	.4850	.4854	.4857
2.2	.4861	.4864	.4868	.4871	.4875	.4878	.4881	.4884	.4887	.4890
2.3	.4893	.4896	.4898	.4901	.4904	.4906	.4909	.4911	.4913	.4916
2.4	.4918	.4920	.4922	.4925	.4927	.4929	.4931	.4932	.4934	.4936
2.5	.4938	.4940	.4941	.4943	.4945	.4946	.4948	.4949	.4951	.4952
2.6	.4953	.4955	.4956	.4957	.4959	.4960	.4961	.4962	.4963	.4964
2.7	.4965	.4966	.4967	.4968	.4969	.4970	.4971	.4972	.4973	.4974
2.8	.4974	.4975	.4976	.4977	.4977	.4978	.4979	.4979	.4980	.4981
2.9	.4981	.4982	.4982	.4983	.4984	.4984	.4985	.4985	.4986	.4986
3.0	.4987	.4987	.4987	.4988	.4988	.4989	.4989	.4989	.4990	.4990

Note: This table gives the area in the right-hand tail of the distribution (i.e., $Z \geq 0$). But since the normal distribution is symmetrical about $Z = 0$, the area in the left-hand tail is the same as the area in the corresponding right-hand tail. For example, $\Pr(-1.96 \leq Z \leq 0) = 0.4750$. Therefore, $\Pr(-1.96 \leq Z \leq 1.96) = 2(0.4750) = 0.95$.

TABLE PERCENTAGE POINTS OF THE t DISTRIBUTION

Example

Pr($t > 2.086$) = 0.025
 Pr($t > 1.725$) = 0.05 for $df = 20$
 Pr($|t| > 1.725$) = 0.10



df \ Pr	0.25 0.50	0.10 0.20	0.05 0.10	0.025 0.05	0.01 0.02	0.005 0.010	0.001 0.002
1	1.000	3.078	6.314	12.706	31.821	63.657	318.31
2	0.816	1.886	2.920	4.303	6.965	9.925	22.327
3	0.765	1.638	2.353	3.182	4.541	5.841	10.214
4	0.741	1.533	2.132	2.776	3.747	4.604	7.173
5	0.727	1.476	2.015	2.571	3.365	4.032	5.893
6	0.718	1.440	1.943	2.447	3.143	3.707	5.208
7	0.711	1.415	1.895	2.365	2.998	3.499	4.785
8	0.706	1.397	1.860	2.306	2.896	3.355	4.501
9	0.703	1.383	1.833	2.262	2.821	3.250	4.297
10	0.700	1.372	1.812	2.228	2.764	3.169	4.144
11	0.697	1.363	1.796	2.201	2.718	3.106	4.025
12	0.695	1.356	1.782	2.179	2.681	3.055	3.930
13	0.694	1.350	1.771	2.160	2.650	3.012	3.852
14	0.692	1.345	1.761	2.145	2.624	2.977	3.787
15	0.691	1.341	1.753	2.131	2.602	2.947	3.733
16	0.690	1.337	1.746	2.120	2.583	2.921	3.686
17	0.689	1.333	1.740	2.110	2.567	2.898	3.646
18	0.688	1.330	1.734	2.101	2.552	2.878	3.610
19	0.688	1.328	1.729	2.093	2.539	2.861	3.579
20	0.687	1.325	1.725	2.086	2.528	2.845	3.552
21	0.686	1.323	1.721	2.080	2.518	2.831	3.527
22	0.686	1.321	1.717	2.074	2.508	2.819	3.505
23	0.685	1.319	1.714	2.069	2.500	2.807	3.485
24	0.685	1.318	1.711	2.064	2.492	2.797	3.467
25	0.684	1.316	1.708	2.060	2.485	2.787	3.450
26	0.684	1.315	1.706	2.056	2.479	2.779	3.435
27	0.684	1.314	1.703	2.052	2.473	2.771	3.421
28	0.683	1.313	1.701	2.048	2.467	2.763	3.408
29	0.683	1.311	1.699	2.045	2.462	2.756	3.396
30	0.683	1.310	1.697	2.042	2.457	2.750	3.385
40	0.681	1.303	1.684	2.021	2.423	2.704	3.307
60	0.679	1.296	1.671	2.000	2.390	2.660	3.232
120	0.677	1.289	1.658	1.980	2.358	2.617	3.160
∞	0.674	1.282	1.645	1.960	2.326	2.576	3.090

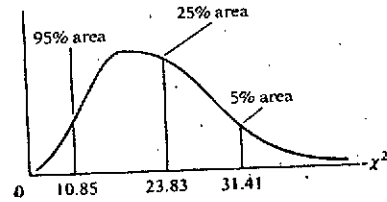
Note: The smaller probability shown at the head of each column is the area in one tail; the larger probability is the area in both tails.

TABLE 1. UPPER PERCENTAGE POINTS OF THE χ^2 DISTRIBUTION

2396

Example

$\Pr(\chi^2 > 10.85) = 0.95$
 $\Pr(\chi^2 > 23.83) = 0.25$ for $df = 20$
 $\Pr(\chi^2 > 31.41) = 0.05$



Degrees of freedom	Pr	.995	.990	.975	.950	.900	.750	.500	.250	.100	.050	.025	.010	.005
1		392704×10^{-10}	157088×10^{-9}	982069×10^{-9}	393214×10^{-8}	.0157908	.1015308	.454937	1.32330	2.70554	3.84146	5.02389	6.63490	7.87944
2		.0100251	.0201007	.0506356	.102587	.210720	.575364	1.38529	2.77259	4.60517	5.99147	7.37776	9.21034	10.5966
3		.0717212	.114832	.215795	.351846	.584375	1.212534	2.36597	4.10835	6.25139	7.81473	9.34840	11.3449	12.8381
4		.206990	.297110	.484419	.710721	1.063823	1.92255	3.35670	5.38527	7.77944	9.48773	11.1433	13.2767	14.8602
5		.411740	.554300	.831211	1.145476	1.61031	2.67460	4.35146	6.62568	9.23635	11.0705	12.8325	15.0863	16.7496
6		.675727	.872085	1.237347	1.63539	2.20413	3.45460	5.34812	7.84080	10.6446	12.5916	14.4494	16.8119	18.5476
7		.969265	1.239043	1.68987	2.16735	2.83311	4.25485	6.34581	9.03715	12.0170	14.0671	16.0128	18.4753	20.2777
8		1.344419	1.646482	2.17973	2.73264	3.48954	5.07064	7.34412	10.2188	13.3616	15.5073	17.5346	20.0902	21.9550
9		1.734926	2.087912	2.70039	3.32511	4.16616	5.89883	8.34283	11.3887	14.6837	16.9190	19.0228	21.6660	23.5893
10		2.15585	2.55821	3.24697	3.94030	4.86518	6.73720	9.34182	12.5489	15.9871	18.3070	20.4831	23.2093	25.1882
11		2.60321	3.05347	3.81575	4.57481	5.57779	7.58412	10.3410	13.7007	17.2750	19.5916	21.9200	24.7250	26.7569
12		3.07382	3.57056	4.40379	5.22603	6.30380	8.43842	11.3403	14.8454	18.5494	21.0261	23.3367	26.2170	28.2995
13		3.56503	4.10691	5.00874	5.89186	7.04150	9.29906	12.3398	15.9839	19.8119	22.3621	24.7356	27.6883	29.8194
14		4.07468	4.66043	5.62872	6.57063	7.78953	10.1653	13.3393	17.1170	21.0642	23.6848	26.1190	29.1413	31.3193
15		4.60094	5.22935	6.26214	7.26094	8.54675	11.0365	14.3389	18.2451	22.3072	24.9958	27.4884	30.5779	32.8013
16		5.14224	5.81221	6.90766	7.96164	9.31223	11.9122	15.3385	19.3688	23.5418	26.2962	28.6454	31.9999	34.2672
17		5.69724	6.40776	7.56418	8.67178	10.0852	12.7919	16.3381	20.4887	24.7690	27.5871	30.1910	33.4087	35.7185
18		6.26481	7.01491	8.23075	9.39046	10.8649	13.6753	17.3379	21.6049	25.9894	28.6693	31.5264	34.8053	37.1564
19		6.84398	7.63273	8.90655	10.1170	11.6509	14.5620	18.3376	22.7178	27.2036	30.1435	32.8523	36.1908	38.5822
20		7.43386	8.26040	9.59083	10.8508	12.4426	15.4518	19.3374	23.8277	28.4120	31.4104	34.1696	37.5662	39.9968
21		8.03366	8.89720	10.28293	11.5913	13.2396	16.3444	20.3372	24.9348	29.6151	32.6705	35.4789	38.9321	41.4010
22		8.64272	9.54249	10.9823	12.3380	14.0415	17.2396	21.3370	26.0393	30.8133	33.9244	36.7807	40.2894	42.7956
23		9.26042	10.19567	11.6885	13.0905	14.8479	18.1373	22.3369	27.1413	32.0069	35.1725	38.0757	41.6384	44.1813
24		9.88623	10.8564	12.4011	13.8484	15.6587	19.0372	23.3367	28.2412	33.1963	36.4151	39.3641	42.9788	45.5585
25		10.5197	11.5240	13.1197	14.6114	16.4734	19.9393	24.3366	29.3389	34.3816	37.6525	40.6465	44.3141	46.9278
26		11.1603	12.1981	13.8439	15.3791	17.2919	20.8434	25.3364	30.4345	35.5631	38.8852	41.9232	45.6417	48.2899
27		11.8076	12.8786	14.5733	16.1513	18.1138	21.7494	26.3363	31.5284	36.7412	40.1133	43.1944	46.9630	49.6449
28		12.4613	13.5648	15.3079	16.9279	18.9392	22.6572	27.3363	32.6205	37.9159	41.3372	44.4607	48.2782	50.9933
29		13.1211	14.2565	16.0471	17.7083	19.7677	23.5666	28.3362	33.7109	39.0875	42.5569	45.7222	49.5879	52.3356
30		13.7867	14.9535	16.7908	18.4926	20.5992	24.4776	29.3360	34.7998	40.2560	43.7729	46.9792	50.8922	53.6720
40		20.7065	22.1643	24.4331	26.5093	29.0505	33.6603	39.3354	45.6160	51.8050	55.7585	59.3417	63.6907	66.7659
50		27.9907	29.7067	32.3574	34.7642	37.6886	42.9421	49.3349	56.3336	63.1673	67.5048	71.4202	76.1539	79.4800
60		35.5346	37.4848	40.4817	43.1879	46.4589	52.2938	59.3347	66.9814	74.3970	79.0819	83.2976	88.3794	91.9517
70		43.2752	45.4418	48.7576	51.7393	55.3290	61.6983	69.3344	77.5766	85.5271	90.5312	95.0231	100.425	104.215
80		51.1720	53.5400	57.1532	60.3915	64.2776	71.1445	79.3343	88.1303	96.5782	101.879	106.629	112.329	116.321
90		59.1963	61.7541	65.6466	69.1260	73.2912	80.6247	89.3342	98.6499	107.565	113.145	118.136	124.116	128.299
100*		67.3276	70.0648	74.2219	77.9295	82.3581	90.1332	99.3341	109.141	118.498	124.342	129.561	135.807	140.169

*For df greater than 100 the expression $\sqrt{2\chi^2} - \sqrt{2k-1} = Z$ follows the standardized normal distribution, where k represents the degrees of freedom.

TABLE UPPER PERCENTAGE POINTS OF THE F DISTRIBUTION

Example

$Pr(F > 1.59) = 0.25$

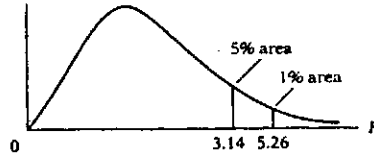
$Pr(F > 2.42) = 0.10$

$Pr(F > 3.14) = 0.05$

$Pr(F > 5.26) = 0.01$

for df $M_1 = 10$

and $M_2 = 9$



2396

df for denominator M_2	df for numerator M_1												df for numerator M_1												Pr	df for denominator M_2		
	Pr	1	2	3	4	5	6	7	8	9	10	11	12	15	20	24	30	40	50	60	100	120	200	500			∞	
1	.25	5.83	7.50	8.20	8.58	8.82	8.98	9.10	9.19	9.26	9.32	9.36	9.41	9.49	9.58	9.63	9.67	9.71	9.74	9.76	9.78	9.80	9.82	9.84	9.85	.25	1	
	.10	39.9	49.5	53.6	55.8	57.2	58.2	58.9	59.4	59.9	60.2	60.5	60.7	61.2	61.7	62.0	62.3	62.5	62.7	62.8	63.0	63.1	63.2	63.3	63.3	.10		
	.05	161	200	216	225	230	234	237	239	241	242	243	244	246	248	249	250	251	252	252	253	253	254	254	254	254		.05
2	.25	2.57	3.00	3.15	3.23	3.28	3.31	3.34	3.35	3.37	3.38	3.39	3.39	3.41	3.43	3.43	3.44	3.45	3.45	3.46	3.47	3.47	3.48	3.48	3.48	.25	2	
	.10	8.53	9.00	9.16	9.24	9.29	9.33	9.35	9.37	9.38	9.39	9.40	9.41	9.42	9.44	9.45	9.46	9.47	9.47	9.47	9.48	9.48	9.49	9.49	9.49	.10		
	.05	18.5	19.0	19.2	19.2	19.3	19.3	19.4	19.4	19.4	19.4	19.4	19.4	19.4	19.4	19.4	19.5	19.5	19.5	19.5	19.5	19.5	19.5	19.5	19.5	19.5		.05
3	.25	2.02	2.28	2.36	2.39	2.41	2.42	2.43	2.44	2.44	2.45	2.45	2.45	2.46	2.46	2.46	2.47	2.47	2.47	2.47	2.47	2.47	2.47	2.47	2.47	.25	3	
	.10	5.54	5.46	5.39	5.34	5.31	5.28	5.27	5.25	5.24	5.23	5.22	5.22	5.20	5.18	5.18	5.17	5.16	5.16	5.15	5.15	5.14	5.14	5.14	5.14	5.13		.10
	.05	10.1	9.55	9.28	9.12	9.01	8.94	8.89	8.85	8.81	8.79	8.76	8.74	8.70	8.66	8.64	8.62	8.59	8.58	8.57	8.55	8.55	8.54	8.53	8.53	8.53		.05
4	.25	1.81	2.00	2.05	2.06	2.07	2.08	2.08	2.08	2.08	2.08	2.08	2.08	2.08	2.08	2.08	2.08	2.08	2.08	2.08	2.08	2.08	2.08	2.08	2.08	.25	4	
	.10	4.54	4.32	4.19	4.11	4.05	4.01	3.98	3.95	3.94	3.92	3.91	3.90	3.87	3.84	3.83	3.82	3.80	3.80	3.79	3.78	3.78	3.78	3.77	3.76	.10		
	.05	7.71	6.94	6.59	6.39	6.26	6.16	6.09	6.04	6.00	5.96	5.94	5.91	5.86	5.80	5.77	5.75	5.72	5.70	5.69	5.68	5.66	5.66	5.65	5.64	5.63		.05
5	.25	1.69	1.85	1.88	1.89	1.89	1.89	1.89	1.89	1.89	1.89	1.89	1.89	1.89	1.88	1.88	1.88	1.88	1.88	1.87	1.87	1.87	1.87	1.87	1.87	.25	5	
	.10	4.06	3.78	3.62	3.52	3.45	3.40	3.37	3.34	3.32	3.30	3.28	3.27	3.24	3.21	3.19	3.17	3.16	3.15	3.14	3.13	3.12	3.12	3.11	3.10	.10		
	.05	8.61	5.79	5.41	5.19	5.05	4.95	4.88	4.82	4.77	4.74	4.71	4.68	4.62	4.56	4.53	4.50	4.46	4.44	4.43	4.41	4.40	4.39	4.37	4.36	.05		
6	.25	1.62	1.76	1.78	1.79	1.79	1.78	1.78	1.78	1.77	1.77	1.77	1.77	1.76	1.76	1.75	1.75	1.75	1.75	1.74	1.74	1.74	1.74	1.74	1.74	.25	6	
	.10	3.78	3.46	3.29	3.18	3.11	3.05	3.01	2.98	2.96	2.94	2.92	2.90	2.87	2.84	2.82	2.80	2.78	2.77	2.76	2.75	2.74	2.73	2.73	2.72	.10		
	.05	5.99	5.14	4.76	4.53	4.39	4.28	4.21	4.15	4.10	4.06	4.03	4.00	3.94	3.87	3.84	3.81	3.77	3.75	3.74	3.71	3.70	3.69	3.68	3.67	.05		
7	.25	1.57	1.70	1.72	1.72	1.71	1.71	1.70	1.70	1.69	1.69	1.69	1.68	1.68	1.67	1.67	1.66	1.66	1.66	1.65	1.65	1.65	1.65	1.65	1.65	.25	7	
	.10	3.59	3.26	3.07	2.96	2.88	2.83	2.78	2.75	2.72	2.70	2.68	2.67	2.63	2.59	2.58	2.56	2.54	2.52	2.51	2.50	2.49	2.48	2.48	2.47	.10		
	.05	5.59	4.74	4.35	4.12	3.97	3.87	3.79	3.73	3.68	3.64	3.60	3.57	3.51	3.44	3.41	3.38	3.34	3.32	3.30	3.27	3.27	3.25	3.24	3.23	.05		
8	.25	1.54	1.66	1.67	1.66	1.66	1.65	1.64	1.64	1.63	1.63	1.63	1.62	1.62	1.61	1.60	1.60	1.59	1.59	1.58	1.58	1.58	1.58	1.58	1.58	.25	8	
	.10	3.46	3.11	2.92	2.81	2.73	2.67	2.62	2.59	2.56	2.54	2.52	2.50	2.46	2.42	2.40	2.38	2.36	2.35	2.34	2.32	2.32	2.31	2.30	2.29	.10		
	.05	5.32	4.46	4.07	3.84	3.69	3.58	3.50	3.44	3.39	3.35	3.31	3.28	3.22	3.15	3.12	3.08	3.04	3.02	3.01	2.97	2.97	2.95	2.94	2.93	.05		
9	.25	1.51	1.62	1.63	1.63	1.62	1.61	1.60	1.60	1.59	1.59	1.58	1.58	1.57	1.56	1.56	1.55	1.55	1.54	1.54	1.53	1.53	1.53	1.53	1.53	.25	9	
	.10	3.36	3.01	2.81	2.69	2.61	2.55	2.51	2.47	2.44	2.42	2.40	2.38	2.34	2.30	2.28	2.25	2.23	2.22	2.21	2.19	2.18	2.17	2.17	2.16	.10		
	.05	5.12	4.26	3.86	3.63	3.48	3.37	3.29	3.23	3.18	3.14	3.10	3.07	3.01	2.94	2.90	2.86	2.83	2.80	2.79	2.76	2.75	2.75	2.74	2.73	.05		
	.01	10.6	8.02	6.99	6.42	6.08	5.80	5.61	5.47	5.35	5.26	5.18	5.11	4.96	4.81	4.73	4.65	4.57	4.52	4.48	4.42	4.40	4.36	4.33	4.31	.01		

(Continued)

TABLE UPPER PERCENTAGE POINTS OF THE F DISTRIBUTION (Continued)

2396

df for denominator N_2	df for numerator N_1																								Pr	df for denominator N_2	
	Pr	1	2	3	4	5	6	7	8	9	10	11	12	15	20	24	30	40	50	60	100	120	200	500			∞
10	.25	1.49	1.60	1.60	1.59	1.59	1.58	1.57	1.56	1.56	1.55	1.55	1.54	1.53	1.52	1.52	1.51	1.51	1.50	1.50	1.49	1.49	1.49	1.48	1.48	.25	10
	.10	3.29	2.92	2.73	2.61	2.52	2.46	2.41	2.38	2.35	2.32	2.30	2.28	2.24	2.20	2.18	2.16	2.13	2.12	2.11	2.09	2.08	2.07	2.06	2.06	.10	
	.05	4.96	4.10	3.71	3.48	3.33	3.22	3.14	3.07	3.02	2.98	2.94	2.91	2.85	2.77	2.74	2.70	2.66	2.64	2.62	2.59	2.58	2.56	2.55	2.54	.05	
11	.01	10.0	7.56	6.55	5.99	5.64	5.39	5.20	5.06	4.94	4.85	4.77	4.71	4.58	4.41	4.33	4.25	4.17	4.12	4.08	4.01	4.00	3.96	3.93	3.91	.01	11
	.25	1.47	1.58	1.58	1.57	1.56	1.55	1.54	1.53	1.53	1.52	1.52	1.51	1.50	1.49	1.49	1.48	1.47	1.47	1.46	1.46	1.46	1.46	1.45	1.45	.25	
	.10	3.23	2.86	2.66	2.54	2.45	2.39	2.34	2.30	2.27	2.25	2.23	2.21	2.17	2.12	2.10	2.08	2.05	2.04	2.03	2.00	2.00	1.99	1.98	1.97	.10	
12	.05	4.84	3.98	3.59	3.36	3.20	3.09	3.01	2.95	2.90	2.85	2.82	2.79	2.72	2.65	2.61	2.57	2.53	2.51	2.49	2.46	2.45	2.43	2.42	2.40	.05	12
	.01	9.65	7.21	6.22	5.67	5.32	5.07	4.89	4.74	4.63	4.54	4.46	4.40	4.25	4.10	4.02	3.94	3.86	3.81	3.78	3.71	3.69	3.66	3.62	3.60	.01	
	.25	1.46	1.56	1.56	1.55	1.54	1.53	1.52	1.51	1.51	1.50	1.50	1.49	1.48	1.47	1.46	1.45	1.45	1.44	1.44	1.43	1.43	1.43	1.42	1.42	.25	
13	.10	3.18	2.81	2.61	2.48	2.39	2.33	2.28	2.24	2.21	2.19	2.17	2.15	2.10	2.06	2.04	2.01	1.99	1.97	1.96	1.94	1.93	1.92	1.91	1.90	.10	13
	.05	4.75	3.89	3.49	3.26	3.11	3.00	2.91	2.85	2.80	2.75	2.72	2.69	2.62	2.54	2.51	2.47	2.43	2.40	2.38	2.35	2.34	2.32	2.31	2.30	.05	
	.01	9.33	6.93	5.95	5.41	5.06	4.82	4.64	4.50	4.39	4.30	4.22	4.16	4.01	3.86	3.78	3.70	3.62	3.57	3.54	3.47	3.45	3.41	3.38	3.36	.01	
14	.25	1.45	1.55	1.55	1.53	1.52	1.51	1.50	1.49	1.49	1.48	1.47	1.47	1.46	1.45	1.44	1.43	1.42	1.42	1.41	1.41	1.40	1.40	1.40	1.40	.25	14
	.10	3.44	2.76	2.56	2.43	2.35	2.28	2.23	2.20	2.16	2.14	2.12	2.10	2.05	2.01	1.98	1.96	1.93	1.92	1.90	1.88	1.88	1.86	1.85	1.85	.10	
	.05	4.67	3.81	3.41	3.18	3.03	2.92	2.83	2.77	2.71	2.67	2.63	2.60	2.53	2.46	2.42	2.38	2.34	2.31	2.30	2.26	2.25	2.23	2.22	2.21	.05	
15	.01	9.07	6.70	5.74	5.21	4.86	4.62	4.44	4.30	4.19	4.10	4.02	3.96	3.82	3.68	3.59	3.51	3.43	3.38	3.34	3.27	3.25	3.22	3.19	3.17	.01	15
	.25	1.44	1.53	1.53	1.52	1.51	1.50	1.49	1.48	1.47	1.46	1.46	1.45	1.44	1.43	1.42	1.41	1.41	1.40	1.40	1.39	1.39	1.39	1.38	1.38	.25	
	.10	3.10	2.73	2.52	2.39	2.31	2.24	2.19	2.15	2.12	2.10	2.08	2.05	2.01	1.96	1.94	1.91	1.89	1.87	1.86	1.83	1.83	1.82	1.80	1.80	.10	
16	.05	4.60	3.74	3.34	3.11	2.96	2.85	2.78	2.70	2.65	2.60	2.57	2.53	2.48	2.39	2.35	2.31	2.27	2.24	2.22	2.19	2.18	2.16	2.14	2.13	.05	16
	.01	8.88	6.51	5.56	5.04	4.69	4.46	4.28	4.14	4.03	3.94	3.86	3.80	3.66	3.51	3.43	3.35	3.27	3.22	3.18	3.11	3.09	3.06	3.03	3.00	.01	
	.25	1.43	1.52	1.52	1.51	1.49	1.48	1.47	1.46	1.46	1.45	1.44	1.44	1.43	1.41	1.40	1.39	1.38	1.37	1.37	1.36	1.36	1.35	1.34	1.34	.25	
17	.10	3.07	2.70	2.49	2.36	2.27	2.21	2.16	2.12	2.09	2.06	2.04	2.02	1.97	1.92	1.90	1.87	1.85	1.83	1.82	1.79	1.79	1.77	1.76	1.76	.10	17
	.05	4.54	3.68	3.29	3.06	2.90	2.79	2.71	2.64	2.59	2.54	2.51	2.48	2.40	2.33	2.29	2.25	2.20	2.18	2.16	2.12	2.11	2.10	2.08	2.07	.05	
	.01	8.68	6.36	5.42	4.89	4.56	4.32	4.14	4.00	3.89	3.80	3.73	3.67	3.52	3.37	3.29	3.21	3.13	3.08	3.05	2.98	2.96	2.92	2.89	2.87	.01	
18	.25	1.42	1.51	1.51	1.50	1.48	1.47	1.46	1.45	1.44	1.44	1.44	1.43	1.41	1.40	1.39	1.38	1.37	1.37	1.36	1.36	1.35	1.34	1.34	1.34	.25	18
	.10	3.05	2.67	2.46	2.33	2.24	2.18	2.13	2.09	2.06	2.03	2.01	1.99	1.94	1.89	1.87	1.84	1.81	1.79	1.78	1.75	1.74	1.73	1.72	1.72	.10	
	.05	4.49	3.63	3.24	3.01	2.85	2.74	2.66	2.59	2.54	2.49	2.46	2.42	2.35	2.28	2.24	2.19	2.15	2.12	2.11	2.07	2.06	2.04	2.02	2.01	.05	
19	.01	8.53	6.23	5.29	4.77	4.44	4.20	4.03	3.89	3.78	3.69	3.62	3.55	3.41	3.26	3.18	3.10	3.02	2.97	2.93	2.86	2.84	2.81	2.78	2.75	.01	19
	.25	1.42	1.51	1.50	1.49	1.47	1.46	1.45	1.44	1.43	1.43	1.42	1.41	1.40	1.39	1.38	1.37	1.36	1.35	1.34	1.34	1.34	1.33	1.33	1.33	.25	
	.10	3.03	2.64	2.44	2.31	2.22	2.15	2.10	2.06	2.03	2.00	1.98	1.96	1.91	1.86	1.84	1.81	1.78	1.76	1.75	1.73	1.72	1.71	1.69	1.69	.10	
20	.05	4.45	3.59	3.20	2.96	2.81	2.70	2.61	2.55	2.49	2.45	2.41	2.38	2.31	2.23	2.19	2.15	2.10	2.08	2.06	2.02	2.01	1.99	1.97	1.96	.05	20
	.01	8.40	6.11	5.18	4.67	4.34	4.10	3.93	3.79	3.68	3.59	3.52	3.46	3.31	3.16	3.08	3.00	2.92	2.87	2.83	2.76	2.75	2.71	2.68	2.65	.01	
	.25	1.41	1.50	1.49	1.48	1.46	1.45	1.44	1.43	1.42	1.41	1.41	1.40	1.39	1.38	1.37	1.36	1.35	1.34	1.33	1.33	1.32	1.31	1.31	1.30	.25	
20	.10	2.99	2.61	2.40	2.27	2.18	2.11	2.06	2.02	1.98	1.96	1.94	1.91	1.86	1.81	1.79	1.76	1.73	1.71	1.70	1.67	1.67	1.65	1.64	1.63	.10	20
	.05	4.38	3.52	3.13	2.90	2.74	2.63	2.54	2.48	2.42	2.38	2.34	2.31	2.23	2.16	2.11	2.07	2.03	2.00	1.98	1.94	1.93	1.91	1.89	1.88	.05	
	.01	8.18	5.93	5.01	4.50	4.17	3.94	3.77	3.63	3.52	3.43	3.36	3.30	3.15	3.00	2.92	2.84	2.76	2.71	2.67	2.60	2.58	2.55	2.51	2.49	.01	
20	.25	1.40	1.49	1.48	1.46	1.45	1.44	1.43	1.42	1.41	1.40	1.39	1.37	1.36	1.35	1.34	1.33	1.33	1.33	1.32	1.31	1.31	1.30	1.30	1.29	.25	20
	.10	2.97	2.59	2.38	2.25	2.16	2.09	2.04	2.00	1.96	1.94	1.92	1.89	1.84	1.79	1.77	1.74	1.71	1.69	1.68	1.65	1.64	1.63	1.62	1.61	.10	
	.05	4.35	3.49	3.10	2.87	2.71	2.60	2.51	2.45	2.39	2.35	2.31	2.28	2.20	2.12	2.08	2.04	1.99	1.97	1.95	1.91	1.90	1.88	1.86	1.84	.05	
.01	8.10	5.85	4.94	4.43	4.10	3.87	3.70	3.56	3.46	3.37	3.29	3.23	3.09	2.94	2.86	2.78	2.69	2.64	2.61	2.54	2.52	2.48	2.44	2.42	.01		

(Continued)

TABLE UPPER PERCENTAGE POINTS OF THE F DISTRIBUTION (Continued)

df for denominator N_2	df for numerator N_1																									df for denominator N_2	
	Pr	df for numerator N_1																							Pr		
		1	2	3	4	5	6	7	8	9	10	11	12	15	20	24	30	40	50	60	100	120	200	500			∞
22	.25	1.40	1.48	1.47	1.45	1.44	1.42	1.41	1.40	1.39	1.39	1.38	1.37	1.36	1.34	1.33	1.32	1.31	1.31	1.30	1.30	1.30	1.29	1.29	1.28	.25	22
	.10	2.95	2.56	2.35	2.22	2.13	2.06	2.01	1.97	1.93	1.90	1.88	1.86	1.81	1.76	1.73	1.70	1.67	1.65	1.64	1.61	1.60	1.59	1.58	1.57	.10	
	.05	4.30	3.44	3.05	2.82	2.68	2.55	2.46	2.40	2.34	2.30	2.26	2.23	2.15	2.07	2.03	1.98	1.94	1.91	1.89	1.85	1.84	1.82	1.80	1.78	.05	
	.01	7.95	5.72	4.82	4.31	3.99	3.76	3.59	3.45	3.35	3.26	3.18	3.12	2.96	2.83	2.75	2.67	2.58	2.53	2.50	2.42	2.40	2.36	2.33	2.31	.01	
24	.25	1.39	1.47	1.46	1.44	1.43	1.41	1.40	1.39	1.38	1.38	1.37	1.36	1.35	1.33	1.32	1.31	1.30	1.29	1.29	1.28	1.28	1.27	1.27	1.26	.25	24
	.10	2.93	2.54	2.33	2.19	2.10	2.04	1.98	1.94	1.91	1.88	1.85	1.83	1.78	1.73	1.70	1.67	1.64	1.62	1.61	1.58	1.57	1.56	1.54	1.53	.10	
	.05	4.26	3.40	3.01	2.78	2.62	2.51	2.42	2.36	2.30	2.25	2.21	2.18	2.11	2.03	1.98	1.94	1.89	1.86	1.84	1.80	1.79	1.77	1.75	1.73	.05	
	.01	7.82	5.61	4.72	4.22	3.90	3.67	3.50	3.36	3.26	3.17	3.09	3.03	2.89	2.74	2.66	2.58	2.49	2.44	2.40	2.33	2.31	2.27	2.24	2.21	.01	
26	.25	1.38	1.46	1.45	1.44	1.42	1.41	1.39	1.38	1.37	1.37	1.36	1.35	1.34	1.32	1.31	1.30	1.29	1.28	1.28	1.26	1.26	1.25	1.25	1.25	.25	26
	.10	2.91	2.52	2.31	2.17	2.08	2.01	1.95	1.92	1.88	1.86	1.84	1.81	1.76	1.71	1.68	1.65	1.61	1.59	1.58	1.55	1.54	1.53	1.51	1.50	.10	
	.05	4.23	3.37	2.98	2.74	2.59	2.47	2.39	2.32	2.27	2.22	2.18	2.15	2.07	1.99	1.95	1.90	1.85	1.82	1.80	1.76	1.75	1.73	1.71	1.69	.05	
	.01	7.72	5.53	4.64	4.14	3.82	3.59	3.42	3.29	3.18	3.09	3.02	2.96	2.81	2.66	2.58	2.50	2.42	2.36	2.33	2.25	2.23	2.19	2.16	2.13	.01	
28	.25	1.38	1.46	1.45	1.43	1.41	1.40	1.39	1.38	1.37	1.36	1.35	1.34	1.33	1.31	1.30	1.29	1.28	1.27	1.26	1.25	1.25	1.24	1.24	1.23	.25	28
	.10	2.89	2.50	2.29	2.16	2.06	2.00	1.94	1.90	1.87	1.84	1.81	1.79	1.74	1.69	1.66	1.63	1.59	1.57	1.56	1.53	1.52	1.50	1.49	1.48	.10	
	.05	4.20	3.34	2.95	2.71	2.56	2.45	2.36	2.29	2.24	2.19	2.15	2.12	2.04	1.96	1.91	1.87	1.82	1.79	1.77	1.73	1.71	1.69	1.67	1.65	.05	
	.01	7.64	5.45	4.57	4.07	3.75	3.53	3.36	3.23	3.12	3.03	2.96	2.90	2.75	2.60	2.52	2.44	2.35	2.30	2.26	2.19	2.17	2.13	2.09	2.06	.01	
30	.25	1.38	1.45	1.44	1.42	1.41	1.39	1.38	1.37	1.36	1.35	1.35	1.34	1.32	1.30	1.29	1.28	1.27	1.26	1.26	1.25	1.24	1.24	1.23	1.23	.25	30
	.10	2.88	2.49	2.28	2.14	2.05	1.98	1.93	1.88	1.85	1.82	1.79	1.77	1.72	1.67	1.64	1.61	1.57	1.55	1.54	1.51	1.50	1.48	1.47	1.46	.10	
	.05	4.17	3.32	2.92	2.69	2.53	2.42	2.33	2.27	2.21	2.16	2.13	2.09	2.01	1.93	1.89	1.84	1.79	1.76	1.74	1.70	1.68	1.66	1.64	1.62	.05	
	.01	7.56	5.39	4.51	4.02	3.70	3.47	3.30	3.17	3.07	2.98	2.91	2.84	2.70	2.55	2.47	2.39	2.30	2.25	2.21	2.13	2.11	2.07	2.03	2.01	.01	
40	.25	1.36	1.44	1.42	1.40	1.39	1.37	1.36	1.35	1.34	1.33	1.32	1.31	1.30	1.28	1.26	1.25	1.24	1.23	1.22	1.21	1.21	1.20	1.19	1.19	.25	40
	.10	2.84	2.44	2.23	2.09	2.00	1.93	1.87	1.83	1.79	1.76	1.73	1.71	1.66	1.61	1.57	1.54	1.51	1.48	1.47	1.43	1.42	1.41	1.39	1.38	.10	
	.05	4.08	3.23	2.84	2.61	2.45	2.34	2.25	2.18	2.12	2.06	2.04	2.00	1.92	1.84	1.79	1.74	1.69	1.66	1.64	1.59	1.58	1.55	1.53	1.51	.05	
	.01	7.31	5.18	4.31	3.83	3.51	3.29	3.12	2.99	2.89	2.80	2.73	2.66	2.52	2.37	2.29	2.20	2.11	2.06	2.02	1.94	1.92	1.87	1.83	1.80	.01	
60	.25	1.35	1.42	1.41	1.38	1.37	1.35	1.33	1.32	1.31	1.30	1.29	1.29	1.27	1.25	1.24	1.22	1.21	1.20	1.19	1.17	1.17	1.16	1.15	1.15	.25	60
	.10	2.79	2.39	2.18	2.04	1.95	1.87	1.82	1.77	1.74	1.71	1.68	1.66	1.60	1.54	1.51	1.48	1.44	1.41	1.40	1.36	1.35	1.33	1.31	1.29	.10	
	.05	4.00	3.15	2.76	2.53	2.37	2.25	2.17	2.10	2.04	1.99	1.95	1.92	1.84	1.75	1.70	1.65	1.59	1.56	1.53	1.48	1.47	1.44	1.41	1.39	.05	
	.01	7.08	4.98	4.13	3.65	3.34	3.12	2.95	2.82	2.72	2.63	2.56	2.50	2.35	2.20	2.12	2.03	1.94	1.88	1.84	1.75	1.73	1.68	1.63	1.60	.01	
120	.25	1.34	1.40	1.39	1.37	1.35	1.33	1.31	1.30	1.29	1.28	1.27	1.26	1.24	1.22	1.21	1.19	1.18	1.17	1.16	1.14	1.13	1.12	1.11	1.10	.25	120
	.10	2.75	2.35	2.13	1.99	1.90	1.82	1.77	1.72	1.68	1.65	1.62	1.60	1.55	1.48	1.45	1.41	1.37	1.34	1.32	1.27	1.26	1.24	1.21	1.19	.10	
	.05	3.92	3.07	2.68	2.45	2.29	2.17	2.09	2.02	1.96	1.91	1.87	1.83	1.75	1.66	1.61	1.55	1.50	1.46	1.43	1.37	1.35	1.32	1.28	1.25	.05	
	.01	6.85	4.79	3.95	3.48	3.17	2.96	2.79	2.66	2.56	2.47	2.40	2.34	2.19	2.03	1.95	1.86	1.76	1.70	1.66	1.56	1.53	1.48	1.42	1.38	.01	
200	.25	1.33	1.39	1.38	1.36	1.34	1.32	1.31	1.29	1.28	1.27	1.26	1.25	1.23	1.21	1.20	1.18	1.16	1.14	1.12	1.11	1.10	1.09	1.08	1.06	.25	200
	.10	2.73	2.33	2.11	1.97	1.88	1.80	1.75	1.70	1.66	1.63	1.60	1.57	1.52	1.46	1.42	1.38	1.34	1.31	1.28	1.24	1.22	1.20	1.17	1.14	.10	
	.05	3.89	3.04	2.65	2.42	2.26	2.14	2.06	1.98	1.93	1.88	1.84	1.80	1.72	1.62	1.57	1.52	1.46	1.41	1.39	1.32	1.29	1.26	1.22	1.19	.05	
	.01	6.76	4.71	3.88	3.41	3.11	2.89	2.73	2.60	2.50	2.41	2.34	2.27	2.13	1.97	1.89	1.79	1.69	1.63	1.58	1.48	1.44	1.39	1.33	1.28	.01	
∞	.25	1.32	1.39	1.37	1.35	1.33	1.31	1.29	1.28	1.27	1.25	1.24	1.24	1.22	1.19	1.18	1.16	1.14	1.13	1.12	1.09	1.08	1.07	1.04	1.00	.25	∞
	.10	2.71	2.30	2.08	1.94	1.85	1.77	1.72	1.67	1.63	1.60	1.57	1.55	1.49	1.42	1.38	1.34	1.30	1.26	1.24	1.18	1.17	1.13	1.08	1.00	.10	
	.05	3.84	3.00	2.60	2.37	2.21	2.10	2.01	1.94	1.88	1.83	1.79	1.75	1.67	1.57	1.52	1.46	1.39	1.35	1.32	1.24	1.22	1.17	1.11	1.00	.05	
	.01	6.63	4.61	3.78	3.32	3.02	2.80	2.64	2.51	2.41	2.32	2.25	2.18	2.04	1.88	1.79	1.70	1.59	1.52	1.47	1.36	1.32	1.25	1.15	1.00	.01	

TABLE
DURBIN-WATSON d STATISTIC: SIGNIFICANCE POINTS OF d_L AND d_U AT 0.01 LEVEL OF SIGNIFICANCE

n	k=1		k=2		k=3		k=4		k=5		k=6		k=7		k=8		k=9		k=10	
	d_L	d_U	d_L	d_U	d_L	d_U	d_L	d_U	d_L	d_U	d_L	d_U	d_L	d_U	d_L	d_U	d_L	d_U	d_L	d_U
6	0.390	1.142	—	—	—	—	—	—	—	—	—	—	—	—	—	—	—	—	—	—
7	0.435	1.036	0.294	1.676	—	—	—	—	—	—	—	—	—	—	—	—	—	—	—	—
8	0.497	1.003	0.345	1.489	0.229	2.102	—	—	—	—	—	—	—	—	—	—	—	—	—	—
9	0.554	0.998	0.408	1.389	0.279	1.875	0.183	2.433	—	—	—	—	—	—	—	—	—	—	—	—
10	0.604	1.001	0.466	1.333	0.340	1.733	0.230	2.193	0.150	2.690	—	—	—	—	—	—	—	—	—	—
11	0.653	1.010	0.519	1.297	0.396	1.640	0.286	2.030	0.193	2.453	0.124	2.892	—	—	—	—	—	—	—	—
12	0.697	1.023	0.569	1.274	0.449	1.575	0.339	1.913	0.244	2.280	0.164	2.665	0.105	3.053	—	—	—	—	—	—
13	0.738	1.038	0.616	1.261	0.499	1.526	0.391	1.826	0.294	2.150	0.211	2.490	0.140	2.838	0.090	3.182	—	—	—	—
14	0.776	1.054	0.660	1.254	0.547	1.490	0.441	1.757	0.343	2.049	0.257	2.354	0.183	2.667	0.122	2.981	0.078	3.287	—	—
15	0.811	1.070	0.700	1.252	0.591	1.464	0.488	1.704	0.391	1.967	0.303	2.244	0.226	2.530	0.161	2.817	0.107	3.101	0.068	3.374
16	0.844	1.086	0.737	1.252	0.633	1.446	0.532	1.663	0.437	1.900	0.349	2.153	0.269	2.416	0.200	2.681	0.142	2.944	0.094	3.201
17	0.874	1.102	0.772	1.255	0.672	1.432	0.574	1.630	0.480	1.847	0.393	2.078	0.313	2.319	0.241	2.566	0.179	2.811	0.127	3.053
18	0.902	1.118	0.805	1.259	0.708	1.422	0.613	1.604	0.522	1.803	0.435	2.015	0.355	2.238	0.282	2.467	0.216	2.697	0.160	2.925
19	0.928	1.132	0.835	1.265	0.742	1.415	0.650	1.584	0.561	1.767	0.476	1.963	0.396	2.169	0.322	2.381	0.255	2.597	0.196	2.813
20	0.952	1.147	0.863	1.271	0.773	1.411	0.685	1.567	0.598	1.737	0.515	1.918	0.436	2.110	0.362	2.308	0.294	2.510	0.232	2.714
21	0.975	1.161	0.890	1.277	0.803	1.408	0.718	1.554	0.633	1.712	0.552	1.881	0.474	2.059	0.400	2.244	0.331	2.434	0.268	2.625
22	0.997	1.174	0.914	1.284	0.831	1.407	0.748	1.543	0.667	1.691	0.587	1.849	0.510	2.015	0.437	2.188	0.368	2.367	0.304	2.548
23	1.018	1.187	0.938	1.291	0.858	1.407	0.777	1.534	0.698	1.673	0.620	1.821	0.545	1.977	0.473	2.140	0.404	2.308	0.340	2.479
24	1.037	1.199	0.960	1.298	0.882	1.407	0.805	1.528	0.728	1.658	0.652	1.797	0.578	1.944	0.507	2.097	0.439	2.255	0.375	2.417
25	1.055	1.211	0.981	1.305	0.906	1.409	0.831	1.523	0.756	1.645	0.682	1.776	0.610	1.915	0.540	2.059	0.473	2.209	0.409	2.362
26	1.072	1.222	1.001	1.312	0.928	1.411	0.855	1.518	0.783	1.635	0.711	1.759	0.640	1.889	0.572	2.026	0.505	2.168	0.441	2.313
27	1.089	1.233	1.019	1.319	0.949	1.413	0.878	1.515	0.808	1.626	0.738	1.743	0.669	1.867	0.602	1.997	0.536	2.131	0.473	2.269
28	1.104	1.244	1.037	1.325	0.969	1.415	0.900	1.513	0.832	1.618	0.764	1.729	0.696	1.847	0.630	1.970	0.566	2.098	0.504	2.229
29	1.119	1.254	1.054	1.332	0.988	1.418	0.921	1.512	0.855	1.611	0.788	1.718	0.723	1.830	0.658	1.947	0.595	2.068	0.533	2.193
30	1.133	1.263	1.070	1.339	1.008	1.421	0.941	1.511	0.877	1.606	0.812	1.707	0.748	1.814	0.684	1.925	0.622	2.041	0.562	2.160
31	1.147	1.273	1.085	1.345	1.023	1.425	0.960	1.510	0.897	1.601	0.834	1.698	0.772	1.800	0.710	1.906	0.649	2.017	0.589	2.131
32	1.160	1.282	1.100	1.352	1.040	1.428	0.979	1.510	0.917	1.597	0.856	1.690	0.794	1.788	0.734	1.889	0.674	1.995	0.615	2.104
33	1.172	1.291	1.114	1.358	1.055	1.432	0.996	1.510	0.936	1.594	0.876	1.683	0.816	1.776	0.757	1.874	0.698	1.975	0.641	2.080
34	1.184	1.299	1.128	1.364	1.070	1.435	1.012	1.511	0.954	1.591	0.896	1.677	0.837	1.766	0.779	1.860	0.722	1.957	0.665	2.057
35	1.195	1.307	1.140	1.370	1.085	1.439	1.028	1.512	0.971	1.589	0.914	1.671	0.857	1.757	0.800	1.847	0.744	1.940	0.689	2.037
36	1.206	1.315	1.153	1.376	1.098	1.442	1.043	1.513	0.988	1.588	0.932	1.666	0.877	1.749	0.821	1.836	0.766	1.925	0.711	2.018
37	1.217	1.323	1.165	1.382	1.112	1.446	1.058	1.514	1.004	1.586	0.950	1.662	0.895	1.742	0.841	1.825	0.787	1.911	0.733	2.001
38	1.227	1.330	1.176	1.388	1.124	1.449	1.072	1.515	1.019	1.585	0.966	1.658	0.913	1.735	0.860	1.816	0.807	1.899	0.754	1.985
39	1.237	1.337	1.187	1.393	1.137	1.453	1.085	1.517	1.034	1.584	0.982	1.655	0.930	1.729	0.878	1.807	0.826	1.887	0.774	1.970
40	1.246	1.344	1.198	1.398	1.148	1.457	1.098	1.518	1.048	1.584	0.997	1.652	0.946	1.724	0.895	1.799	0.844	1.876	0.749	1.956
45	1.288	1.376	1.245	1.423	1.201	1.474	1.156	1.528	1.111	1.584	1.065	1.643	1.019	1.704	0.974	1.768	0.927	1.834	0.881	1.902
50	1.324	1.403	1.285	1.446	1.245	1.491	1.205	1.538	1.164	1.587	1.123	1.639	1.081	1.692	1.039	1.748	0.997	1.805	0.955	1.864
55	1.356	1.427	1.320	1.466	1.284	1.506	1.247	1.548	1.209	1.592	1.172	1.638	1.134	1.685	1.095	1.734	1.057	1.785	1.018	1.837
60	1.383	1.449	1.350	1.484	1.317	1.520	1.283	1.558	1.249	1.598	1.214	1.639	1.179	1.682	1.144	1.726	1.108	1.771	1.072	1.817
65	1.407	1.468	1.377	1.500	1.346	1.534	1.315	1.568	1.283	1.604	1.251	1.642	1.218	1.680	1.186	1.720	1.153	1.761	1.120	1.802
70	1.429	1.485	1.400	1.515	1.372	1.546	1.343	1.578	1.313	1.611	1.283	1.645	1.253	1.680	1.223	1.716	1.192	1.754	1.162	1.792
75	1.448	1.501	1.422	1.529	1.395	1.557	1.368	1.587	1.340	1.617	1.313	1.649	1.284	1.682	1.256	1.714	1.227	1.748	1.199	1.783
80	1.466	1.515	1.441	1.541	1.416	1.568	1.390	1.595	1.364	1.624	1.338	1.653	1.312	1.683	1.285	1.714	1.259	1.745	1.232	1.777
85	1.482	1.528	1.458	1.553	1.435	1.578	1.411	1.603	1.386	1.630	1.362	1.657	1.337	1.685	1.312	1.714	1.287	1.743	1.262	1.773
90	1.496	1.540	1.474	1.563	1.452	1.587	1.429	1.611	1.406	1.636	1.383	1.661	1.360	1.687	1.336	1.714	1.312	1.741	1.288	1.769
95	1.510	1.552	1.489	1.573	1.468	1.596	1.446	1.618	1.425	1.642	1.403	1.666	1.381	1.690	1.358	1.715	1.336	1.741	1.313	1.767
100	1.522	1.562	1.503	1.583	1.482	1.604	1.482	1.625	1.441	1.647	1.421	1.670	1.400	1.693	1.378	1.717	1.357	1.741	1.335	1.765
150	1.611	1.637	1.598	1.651	1.584	1.665	1.571	1.679	1.557	1.693	1.543	1.708	1.530	1.722	1.515	1.737	1.501	1.752	1.486	1.767
200	1.664	1.684	1.653	1.693	1.643	1.704	1.633	1.715	1.623	1.725	1.613	1.735	1.603	1.746	1.592	1.757	1.582	1.768	1.571	1.779

2396

n	k' = 11		k' = 12		k' = 13		k' = 14		k' = 15		k' = 16		k' = 17		k' = 18		k' = 19		k' = 20	
	d _L	d _U	d _L	d _U	d _L	d _U	d _L	d _U	d _L	d _U	d _L	d _U	d _L	d _U	d _L	d _U	d _L	d _U	d _L	d _U
16	0.060	3.446	—	—	—	—	—	—	—	—	—	—	—	—	—	—	—	—	—	—
17	0.084	3.286	0.053	3.506	—	—	—	—	—	—	—	—	—	—	—	—	—	—	—	—
18	0.113	3.146	0.075	3.358	0.047	3.357	—	—	—	—	—	—	—	—	—	—	—	—	—	—
19	0.145	3.023	0.102	3.227	0.067	3.420	0.043	3.601	—	—	—	—	—	—	—	—	—	—	—	—
20	0.178	2.914	0.131	3.109	0.092	3.297	0.061	3.474	0.038	3.639	—	—	—	—	—	—	—	—	—	—
21	0.212	2.817	0.162	3.004	0.119	3.185	0.084	3.358	0.055	3.521	0.035	3.671	—	—	—	—	—	—	—	—
22	0.246	2.729	0.194	2.909	0.148	3.084	0.109	3.252	0.077	3.412	0.050	3.562	0.032	3.700	—	—	—	—	—	—
23	0.281	2.651	0.227	2.822	0.178	2.991	0.138	3.155	0.100	3.311	0.070	3.459	0.046	3.597	0.029	3.725	—	—	—	—
24	0.315	2.580	0.260	2.744	0.209	2.906	0.165	3.065	0.125	3.218	0.092	3.363	0.065	3.501	0.043	3.629	0.027	3.747	—	—
25	0.348	2.517	0.292	2.674	0.240	2.829	0.194	2.982	0.152	3.131	0.116	3.274	0.085	3.410	0.060	3.538	0.039	3.657	0.025	3.768
26	0.381	2.460	0.324	2.610	0.272	2.758	0.224	2.906	0.180	3.050	0.141	3.191	0.107	3.325	0.079	3.452	0.055	3.572	0.038	3.682
27	0.413	2.409	0.356	2.552	0.303	2.694	0.253	2.836	0.208	2.976	0.167	3.113	0.131	3.245	0.100	3.371	0.073	3.490	0.051	3.602
28	0.444	2.363	0.387	2.499	0.333	2.635	0.283	2.772	0.237	2.907	0.194	3.040	0.156	3.169	0.122	3.294	0.093	3.412	0.068	3.524
29	0.474	2.321	0.417	2.451	0.363	2.582	0.313	2.713	0.266	2.843	0.222	2.972	0.182	3.098	0.146	3.220	0.114	3.338	0.087	3.450
30	0.503	2.283	0.447	2.407	0.393	2.533	0.342	2.659	0.294	2.785	0.249	2.909	0.208	3.032	0.171	3.152	0.137	3.267	0.107	3.379
31	0.531	2.248	0.475	2.367	0.422	2.487	0.371	2.609	0.322	2.730	0.277	2.851	0.234	2.970	0.196	3.087	0.160	3.201	0.128	3.311
32	0.558	2.216	0.503	2.330	0.450	2.446	0.399	2.563	0.350	2.680	0.304	2.797	0.261	2.912	0.221	3.026	0.184	3.137	0.151	3.246
33	0.585	2.187	0.530	2.296	0.477	2.408	0.426	2.520	0.377	2.633	0.331	2.746	0.287	2.858	0.246	2.969	0.209	3.078	0.174	3.184
34	0.610	2.160	0.556	2.266	0.503	2.373	0.452	2.481	0.404	2.590	0.357	2.699	0.313	2.808	0.272	2.915	0.233	3.022	0.197	3.126
35	0.634	2.136	0.581	2.237	0.529	2.340	0.478	2.444	0.430	2.550	0.383	2.655	0.339	2.761	0.297	2.865	0.257	2.969	0.221	3.071
36	0.658	2.113	0.605	2.210	0.554	2.310	0.504	2.410	0.455	2.512	0.409	2.614	0.364	2.717	0.322	2.818	0.282	2.919	0.244	3.019
37	0.680	2.092	0.628	2.186	0.578	2.282	0.528	2.379	0.480	2.477	0.434	2.576	0.389	2.675	0.347	2.774	0.306	2.872	0.268	2.969
38	0.702	2.073	0.651	2.164	0.601	2.256	0.552	2.350	0.504	2.445	0.458	2.540	0.414	2.637	0.371	2.733	0.330	2.828	0.291	2.923
39	0.723	2.055	0.673	2.143	0.623	2.232	0.575	2.323	0.528	2.414	0.482	2.507	0.438	2.600	0.395	2.694	0.354	2.787	0.315	2.879
40	0.744	2.039	0.694	2.123	0.645	2.210	0.597	2.297	0.551	2.386	0.505	2.476	0.461	2.566	0.418	2.657	0.377	2.748	0.338	2.838
45	0.835	1.972	0.790	2.044	0.744	2.118	0.700	2.193	0.655	2.269	0.612	2.346	0.570	2.424	0.528	2.503	0.488	2.582	0.448	2.661
50	0.913	1.925	0.871	1.987	0.829	2.051	0.787	2.116	0.746	2.182	0.705	2.250	0.665	2.318	0.625	2.387	0.586	2.456	0.548	2.526
55	0.979	1.891	0.940	1.945	0.902	2.002	0.863	2.059	0.825	2.117	0.786	2.176	0.748	2.237	0.711	2.298	0.674	2.359	0.637	2.421
60	1.037	1.865	1.001	1.914	0.965	1.964	0.929	2.015	0.893	2.067	0.857	2.120	0.822	2.173	0.786	2.227	0.751	2.283	0.716	2.338
65	1.087	1.845	1.053	1.889	1.020	1.934	0.986	1.990	0.953	2.027	0.919	2.075	0.886	2.123	0.852	2.172	0.819	2.221	0.786	2.272
70	1.131	1.831	1.099	1.870	1.068	1.911	1.037	1.953	1.005	1.995	0.974	2.038	0.943	2.082	0.911	2.127	0.880	2.172	0.849	2.217
75	1.170	1.819	1.141	1.855	1.111	1.893	1.082	1.931	1.052	1.970	1.023	2.009	0.993	2.049	0.964	2.090	0.934	2.131	0.905	2.172
80	1.205	1.810	1.177	1.844	1.150	1.878	1.122	1.913	1.094	1.949	1.066	1.994	1.039	2.022	1.011	2.059	0.983	2.097	0.955	2.135
85	1.236	1.803	1.210	1.834	1.184	1.866	1.158	1.898	1.132	1.931	1.106	1.965	1.080	1.999	1.053	2.033	1.027	2.068	1.000	2.104
90	1.264	1.798	1.240	1.827	1.215	1.856	1.191	1.886	1.166	1.917	1.141	1.948	1.116	1.979	1.091	2.012	1.066	2.044	1.041	2.077
95	1.290	1.793	1.267	1.821	1.244	1.848	1.221	1.876	1.197	1.905	1.174	1.934	1.150	1.963	1.126	1.993	1.102	2.023	1.079	2.054
100	1.314	1.790	1.292	1.816	1.270	1.841	1.248	1.868	1.225	1.895	1.203	1.922	1.181	1.949	1.158	1.977	1.136	2.006	1.113	2.034
150	1.473	1.783	1.458	1.799	1.444	1.814	1.429	1.830	1.414	1.847	1.400	1.863	1.385	1.880	1.370	1.897	1.355	1.913	1.340	1.931
200	1.561	1.791	1.550	1.801	1.539	1.813	1.528	1.824	1.518	1.836	1.507	1.847	1.495	1.860	1.484	1.871	1.474	1.883	1.462	1.896

Note: n = number of observations
 k' = number of explanatory variables excluding the constant term.
 Source: Savin and White, op. cit., by permission of the Econometric Society.

TABLE :
DURBIN-WATSON d STATISTIC: SIGNIFICANCE POINTS OF d_L AND d_U AT 0.05 LEVEL OF SIGNIFICANCE

n	k' = 1		k' = 2		k' = 3		k' = 4		k' = 5		k' = 6		k' = 7		k' = 8		k' = 9		k' = 10	
	d_L	d_U	d_L	d_U	d_L	d_U	d_L	d_U	d_L	d_U	d_L	d_U	d_L	d_U	d_L	d_U	d_L	d_U	d_L	d_U
6	0.610	1.400	—	—	—	—	—	—	—	—	—	—	—	—	—	—	—	—	—	—
7	0.700	1.356	0.467	1.896	—	—	—	—	—	—	—	—	—	—	—	—	—	—	—	—
8	0.783	1.332	0.559	1.777	0.363	2.287	—	—	—	—	—	—	—	—	—	—	—	—	—	—
9	0.824	1.320	0.629	1.699	0.455	2.128	0.296	2.588	—	—	—	—	—	—	—	—	—	—	—	—
10	0.879	1.320	0.697	1.641	0.525	2.016	0.376	2.414	0.243	2.822	—	—	—	—	—	—	—	—	—	—
11	0.927	1.324	0.658	1.604	0.595	1.928	0.444	2.283	0.316	2.645	0.203	3.005	—	—	—	—	—	—	—	—
12	0.971	1.331	0.812	1.579	0.658	1.864	0.512	2.177	0.379	2.506	0.268	2.832	0.171	3.149	—	—	—	—	—	—
13	1.010	1.340	0.861	1.562	0.715	1.816	0.574	2.094	0.445	2.390	0.328	2.692	0.230	2.985	0.147	3.266	—	—	—	—
14	1.045	1.350	0.905	1.551	0.767	1.779	0.632	2.030	0.506	2.296	0.389	2.572	0.286	2.848	0.200	3.111	0.127	3.380	—	—
15	1.077	1.361	0.946	1.543	0.814	1.750	0.685	1.977	0.562	2.220	0.447	2.472	0.343	2.727	0.251	2.979	0.175	3.216	0.111	3.438
16	1.106	1.371	0.982	1.539	0.857	1.728	0.734	1.935	0.615	2.157	0.502	2.388	0.398	2.624	0.304	2.860	0.222	3.090	0.155	3.304
17	1.133	1.381	1.015	1.536	0.897	1.710	0.779	1.900	0.664	2.104	0.554	2.318	0.451	2.537	0.356	2.757	0.272	2.975	0.198	3.184
18	1.158	1.391	1.046	1.535	0.933	1.698	0.820	1.872	0.710	2.060	0.603	2.257	0.502	2.461	0.407	2.667	0.321	2.873	0.244	3.073
19	1.180	1.401	1.074	1.536	0.967	1.685	0.859	1.848	0.752	2.023	0.649	2.206	0.549	2.396	0.456	2.589	0.369	2.783	0.290	2.974
20	1.201	1.411	1.100	1.537	0.998	1.676	0.894	1.828	0.792	1.991	0.692	2.162	0.595	2.339	0.502	2.521	0.416	2.704	0.336	2.885
21	1.221	1.420	1.125	1.538	1.026	1.669	0.927	1.812	0.829	1.964	0.732	2.124	0.637	2.290	0.547	2.460	0.461	2.633	0.380	2.806
22	1.239	1.429	1.147	1.541	1.053	1.664	0.958	1.797	0.863	1.940	0.769	2.090	0.677	2.246	0.588	2.407	0.504	2.571	0.424	2.734
23	1.257	1.437	1.168	1.543	1.078	1.660	0.986	1.785	0.895	1.920	0.804	2.061	0.715	2.208	0.628	2.360	0.545	2.514	0.465	2.670
24	1.273	1.446	1.188	1.546	1.101	1.656	1.013	1.775	0.925	1.902	0.837	2.035	0.751	2.174	0.666	2.318	0.584	2.464	0.506	2.613
25	1.288	1.454	1.206	1.550	1.123	1.654	1.038	1.767	0.953	1.886	0.868	2.012	0.784	2.144	0.702	2.280	0.621	2.419	0.544	2.560
26	1.302	1.461	1.224	1.553	1.143	1.652	1.062	1.759	0.979	1.873	0.897	1.992	0.816	2.117	0.735	2.246	0.657	2.379	0.581	2.513
27	1.316	1.469	1.240	1.556	1.162	1.651	1.084	1.753	1.004	1.861	0.925	1.974	0.845	2.093	0.767	2.216	0.691	2.342	0.616	2.470
28	1.328	1.476	1.255	1.560	1.181	1.650	1.104	1.747	1.028	1.850	0.951	1.958	0.874	2.071	0.798	2.188	0.723	2.309	0.650	2.431
29	1.341	1.483	1.270	1.563	1.198	1.650	1.124	1.743	1.050	1.841	0.975	1.944	0.900	2.052	0.826	2.164	0.753	2.278	0.682	2.396
30	1.352	1.489	1.284	1.567	1.214	1.650	1.143	1.739	1.071	1.833	0.998	1.931	0.926	2.034	0.854	2.141	0.782	2.251	0.712	2.363
31	1.363	1.496	1.297	1.570	1.229	1.650	1.160	1.735	1.090	1.825	1.020	1.920	0.950	2.018	0.879	2.120	0.810	2.226	0.741	2.333
32	1.373	1.502	1.309	1.574	1.244	1.650	1.177	1.732	1.109	1.819	1.041	1.909	0.972	2.004	0.904	2.102	0.836	2.203	0.769	2.306
33	1.383	1.508	1.321	1.577	1.258	1.651	1.193	1.730	1.127	1.813	1.061	1.900	0.994	1.991	0.927	2.085	0.861	2.181	0.795	2.281
34	1.393	1.514	1.333	1.580	1.271	1.652	1.208	1.728	1.144	1.808	1.080	1.891	1.015	1.979	0.950	2.069	0.885	2.162	0.821	2.257
35	1.402	1.519	1.343	1.584	1.283	1.653	1.222	1.726	1.160	1.803	1.097	1.884	1.034	1.967	0.971	2.054	0.908	2.144	0.845	2.236
36	1.411	1.525	1.354	1.587	1.295	1.654	1.236	1.724	1.175	1.799	1.114	1.877	1.053	1.957	0.991	2.041	0.930	2.127	0.868	2.216
37	1.419	1.530	1.364	1.590	1.307	1.655	1.249	1.723	1.190	1.795	1.131	1.870	1.071	1.948	1.011	2.029	0.951	2.112	0.891	2.198
38	1.427	1.535	1.373	1.594	1.318	1.656	1.261	1.722	1.204	1.792	1.146	1.864	1.088	1.939	1.029	2.017	0.970	2.098	0.912	2.180
39	1.435	1.540	1.382	1.597	1.328	1.658	1.273	1.722	1.218	1.789	1.161	1.859	1.104	1.932	1.047	2.007	0.990	2.085	0.932	2.164
40	1.442	1.544	1.391	1.600	1.338	1.659	1.285	1.721	1.230	1.786	1.175	1.854	1.120	1.924	1.064	1.997	1.008	2.072	0.952	2.149
45	1.475	1.566	1.430	1.615	1.383	1.666	1.336	1.720	1.287	1.776	1.238	1.835	1.189	1.895	1.139	1.958	1.089	2.022	1.038	2.088
50	1.503	1.585	1.462	1.628	1.421	1.674	1.378	1.721	1.335	1.771	1.291	1.822	1.246	1.875	1.201	1.930	1.156	1.986	1.110	2.044
55	1.528	1.601	1.490	1.641	1.452	1.681	1.414	1.724	1.374	1.768	1.334	1.814	1.294	1.861	1.253	1.909	1.212	1.959	1.170	2.010
60	1.549	1.616	1.514	1.652	1.480	1.689	1.444	1.727	1.408	1.767	1.372	1.808	1.335	1.850	1.298	1.894	1.260	1.939	1.222	1.984
65	1.567	1.629	1.538	1.662	1.503	1.696	1.471	1.731	1.438	1.767	1.404	1.805	1.370	1.843	1.336	1.882	1.301	1.923	1.266	1.964
70	1.583	1.641	1.564	1.672	1.525	1.703	1.494	1.735	1.464	1.788	1.433	1.802	1.401	1.837	1.369	1.873	1.337	1.910	1.305	1.948
75	1.598	1.652	1.571	1.680	1.543	1.709	1.515	1.739	1.487	1.770	1.458	1.801	1.428	1.834	1.399	1.867	1.369	1.901	1.339	1.935
80	1.611	1.662	1.586	1.688	1.560	1.715	1.534	1.743	1.507	1.772	1.480	1.801	1.453	1.831	1.425	1.861	1.397	1.893	1.369	1.925
85	1.624	1.671	1.600	1.696	1.575	1.721	1.550	1.747	1.525	1.774	1.500	1.801	1.474	1.829	1.448	1.857	1.422	1.886	1.396	1.916
90	1.635	1.679	1.612	1.703	1.589	1.726	1.566	1.751	1.542	1.776	1.518	1.801	1.494	1.827	1.469	1.854	1.445	1.881	1.420	1.909
95	1.645	1.687	1.623	1.709	1.602	1.732	1.579	1.755	1.557	1.778	1.535	1.802	1.512	1.827	1.489	1.852	1.465	1.877	1.442	1.903
100	1.654	1.694	1.634	1.715	1.613	1.736	1.592	1.758	1.571	1.780	1.550	1.803	1.528	1.826	1.506	1.850	1.484	1.874	1.462	1.898
150	1.720	1.746	1.706	1.760	1.693	1.774	1.679	1.788	1.665	1.802	1.651	1.817	1.637	1.832	1.622	1.847	1.608	1.862	1.594	1.877
200	1.758	1.778	1.748	1.789	1.738	1.799	1.728	1.810	1.718	1.820	1.707	1.831	1.697	1.841	1.686	1.852	1.675	1.863	1.665	1.874

n	k' = 11		k = 12		k' = 13		k = 14		k' = 15		k = 16		k' = 17		k = 18		k = 19		k' = 20	
	d _L	d _U	d _L	d _U	d _L	d _U	d _L	d _U	d _L	d _U	d _L	d _U	d _L	d _U	d _L	d _U	d _L	d _U	d _L	d _U
16	0.098	3.503																		
17	0.138	3.378	0.087	3.557																
18	0.177	3.265	0.123	3.441	0.078	3.603														
19	0.220	3.159	0.160	3.335	0.111	3.496	0.070	3.642												
20	0.263	3.063	0.200	3.234	0.145	3.395	0.100	3.542	0.063	3.676										
21	0.307	2.976	0.240	3.141	0.182	3.300	0.132	3.448	0.091	3.583	0.058	3.705								
22	0.349	2.897	0.281	3.057	0.220	3.211	0.166	3.358	0.120	3.495	0.083	3.619	0.052	3.731						
23	0.391	2.826	0.322	2.979	0.259	3.128	0.202	3.272	0.153	3.409	0.110	3.535	0.076	3.650	0.048	3.753				
24	0.431	2.761	0.362	2.908	0.297	3.053	0.239	3.193	0.186	3.327	0.141	3.454	0.101	3.572	0.070	3.678	0.044	3.773		
25	0.470	2.702	0.400	2.844	0.335	2.983	0.275	3.119	0.221	3.251	0.172	3.376	0.130	3.494	0.094	3.604	0.065	3.702	0.041	3.790
26	0.508	2.649	0.438	2.784	0.373	2.919	0.312	3.051	0.256	3.179	0.205	3.303	0.160	3.420	0.120	3.531	0.087	3.632	0.060	3.724
27	0.544	2.600	0.475	2.730	0.409	2.859	0.348	2.987	0.291	3.112	0.238	3.233	0.191	3.349	0.149	3.460	0.112	3.563	0.081	3.658
28	0.578	2.555	0.510	2.680	0.445	2.805	0.383	2.928	0.325	3.050	0.271	3.168	0.222	3.283	0.178	3.392	0.138	3.495	0.104	3.592
29	0.612	2.515	0.544	2.634	0.479	2.755	0.418	2.874	0.359	2.992	0.305	3.107	0.254	3.219	0.208	3.327	0.166	3.431	0.129	3.528
30	0.643	2.477	0.577	2.592	0.512	2.708	0.451	2.823	0.392	2.937	0.337	3.050	0.286	3.160	0.238	3.266	0.195	3.368	0.156	3.465
31	0.674	2.443	0.608	2.553	0.545	2.665	0.484	2.776	0.425	2.887	0.370	2.996	0.317	3.103	0.269	3.208	0.224	3.309	0.183	3.406
32	0.703	2.411	0.638	2.517	0.576	2.625	0.515	2.733	0.457	2.840	0.401	2.946	0.349	3.050	0.299	3.153	0.253	3.252	0.211	3.348
33	0.731	2.382	0.668	2.484	0.606	2.588	0.546	2.692	0.488	2.795	0.432	2.899	0.379	3.000	0.329	3.100	0.283	3.198	0.239	3.293
34	0.758	2.355	0.695	2.454	0.634	2.554	0.575	2.654	0.518	2.754	0.462	2.854	0.409	2.954	0.359	3.051	0.312	3.147	0.267	3.240
35	0.783	2.330	0.722	2.425	0.662	2.521	0.604	2.619	0.547	2.716	0.492	2.813	0.439	2.910	0.388	3.005	0.340	3.099	0.295	3.190
36	0.808	2.306	0.748	2.398	0.689	2.492	0.631	2.586	0.575	2.680	0.520	2.774	0.467	2.868	0.417	2.961	0.369	3.053	0.323	3.142
37	0.831	2.285	0.772	2.374	0.714	2.464	0.657	2.555	0.602	2.646	0.548	2.738	0.495	2.829	0.445	2.920	0.397	3.009	0.351	3.097
38	0.854	2.265	0.796	2.351	0.739	2.438	0.683	2.526	0.628	2.614	0.575	2.703	0.522	2.792	0.472	2.880	0.424	2.968	0.378	3.054
39	0.875	2.246	0.819	2.329	0.763	2.413	0.707	2.499	0.653	2.585	0.600	2.671	0.549	2.757	0.499	2.843	0.451	2.929	0.404	3.013
40	0.896	2.228	0.840	2.309	0.785	2.391	0.731	2.473	0.678	2.557	0.626	2.641	0.575	2.724	0.525	2.808	0.477	2.892	0.430	2.974
45	0.988	2.156	0.938	2.225	0.887	2.296	0.838	2.367	0.788	2.439	0.740	2.512	0.692	2.586	0.644	2.659	0.598	2.733	0.553	2.807
50	1.064	2.103	1.019	2.163	0.973	2.225	0.927	2.287	0.882	2.350	0.836	2.414	0.792	2.479	0.747	2.544	0.703	2.610	0.660	2.675
55	1.129	2.062	1.087	2.116	1.045	2.170	1.003	2.225	0.961	2.281	0.919	2.338	0.877	2.396	0.836	2.454	0.795	2.512	0.754	2.571
60	1.184	2.031	1.145	2.079	1.106	2.127	1.068	2.177	1.029	2.227	0.990	2.278	0.951	2.330	0.913	2.382	0.874	2.434	0.836	2.487
65	1.231	2.006	1.195	2.049	1.160	2.093	1.124	2.138	1.088	2.183	1.052	2.229	1.016	2.276	0.980	2.323	0.944	2.371	0.908	2.419
70	1.272	1.986	1.239	2.026	1.206	2.066	1.172	2.106	1.139	2.148	1.105	2.189	1.072	2.232	1.038	2.275	1.005	2.318	0.971	2.362
75	1.308	1.970	1.277	2.006	1.247	2.043	1.215	2.080	1.184	2.118	1.153	2.156	1.121	2.195	1.090	2.235	1.058	2.275	1.027	2.315
80	1.340	1.957	1.311	1.991	1.283	2.024	1.253	2.059	1.224	2.093	1.195	2.129	1.165	2.165	1.136	2.201	1.106	2.238	1.076	2.275
85	1.369	1.946	1.342	1.977	1.315	2.009	1.287	2.040	1.260	2.073	1.232	2.105	1.205	2.139	1.177	2.172	1.149	2.206	1.121	2.241
90	1.395	1.937	1.369	1.966	1.344	1.995	1.318	2.025	1.292	2.055	1.266	2.085	1.240	2.116	1.213	2.148	1.187	2.179	1.160	2.211
95	1.418	1.929	1.394	1.956	1.370	1.984	1.345	2.012	1.321	2.040	1.296	2.068	1.271	2.097	1.247	2.126	1.222	2.156	1.197	2.186
100	1.439	1.923	1.416	1.948	1.393	1.974	1.371	2.000	1.347	2.026	1.324	2.053	1.301	2.080	1.277	2.108	1.253	2.135	1.229	2.164
150	1.579	1.892	1.564	1.908	1.550	1.924	1.535	1.940	1.519	1.956	1.504	1.972	1.489	1.989	1.474	2.006	1.458	2.023	1.443	2.040
200	1.654	1.885	1.643	1.896	1.632	1.908	1.621	1.919	1.610	1.931	1.599	1.943	1.588	1.955	1.576	1.967	1.565	1.979	1.554	1.991

Source: This table is an extension of the original Durbin-Watson table and is reproduced from N. E. Savin and K. J. White, "The Durbin-Watson Test for Serial Correlation with Extreme Small Samples or Many Regressors," *Econometrica*, vol. 45, November 1977, pp. 1989-96 and as corrected by R. W. Farebrother, *Econometrica*, vol. 48, September 1980, p. 1554. Reprinted by permission of the Econometric Society.
 Note: n = number of observations, k = number of explanatory variables excluding the constant term.

EXAMPLE

If $n = 40$ and $k' = 4$, $d_L = 1.285$ and $d_U = 1.721$. If a computed d value is less than 1.285, there is evidence of positive first-order serial correlation; if it is greater than 1.721, there is no evidence of positive first-order serial correlation; but if d lies between the lower and the upper limit, there is inconclusive evidence regarding the presence or absence of positive first-order serial correlation.